

**Sample Entrance
Exam Paper**

Grade-1

1. What is your name?

2. Write the letter in upper case and lower case.

Upper case

— ----- —	— ----- —	— ----- —	— ----- —	— ----- —	— ----- —	— ----- —	— ----- —	— ----- —
— ----- —	— ----- —	— ----- —	— ----- —	— ----- —	— ----- —	— ----- —	— ----- —	— ----- —
— ----- —	— ----- —	— ----- —	— ----- —	— ----- —	— ----- —	— ----- —	— ----- —	— ----- —

Lower case

— ----- —	— ----- —	— ----- —	— ----- —	— ----- —	— ----- —	— ----- —	— ----- —	— ----- —
— ----- —	— ----- —	— ----- —	— ----- —	— ----- —	— ----- —	— ----- —	— ----- —	— ----- —
— ----- —	— ----- —	— ----- —	— ----- —	— ----- —	— ----- —	— ----- —	— ----- —	— ----- —

3. Fill in the missing letters.

1.



c t

2.



d g

3.



s t

4.



b d

5.



r d

6.



s n

4. Point to each word and read the word.

fat



run



on



the



what



5. Read the story and answer the question.

Todd the Frog

Todd is a frog. Todd hops on a log. Todd sits on a log. The log is hot.

1. What did Todd hop on?



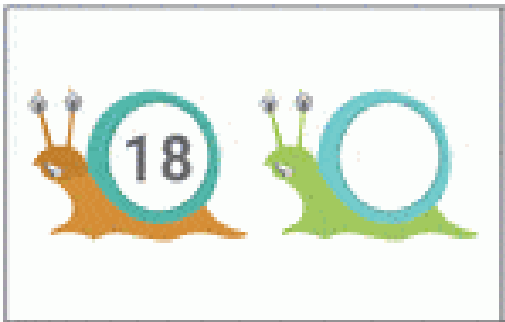
Grade one student checklist

skills	ability	comments
Can write upper case letters		
Can write lower case letters		
Recognizes consonant sounds		
Recognizes vowel sounds		
Reads a short passage		
Understands and answers passage question		
Follows directions		
Writes on the line		




















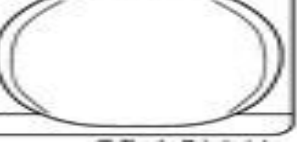
Math

Write the Numbers 1- 20.

What comes next?



Write the missing numbers.

Add the following:-



$$3 + 3 = \boxed{}$$



$$5 + 2 = \boxed{}$$

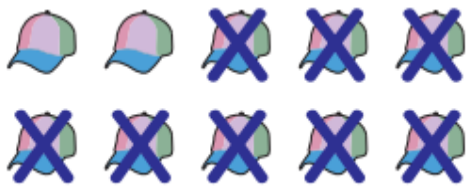


$$3 + 6 = \boxed{}$$



$$4 + 4 = \boxed{}$$

Subtract the following:-



$$10 - 8 = \boxed{}$$



$$7 - 3 = \boxed{}$$

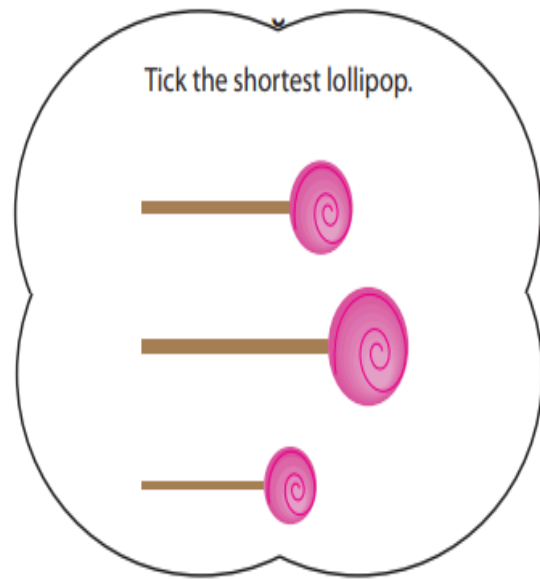
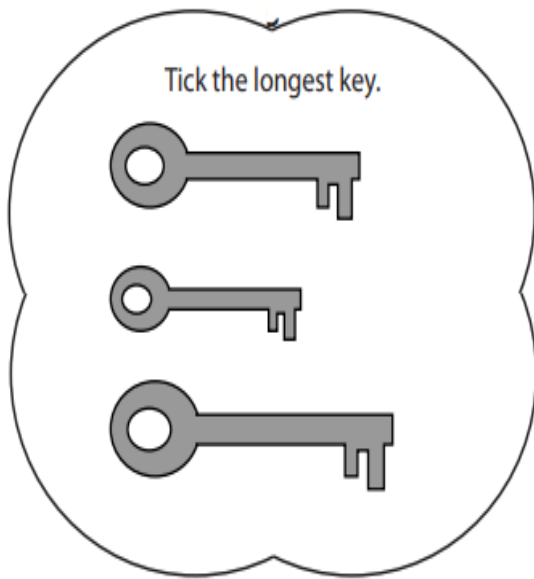
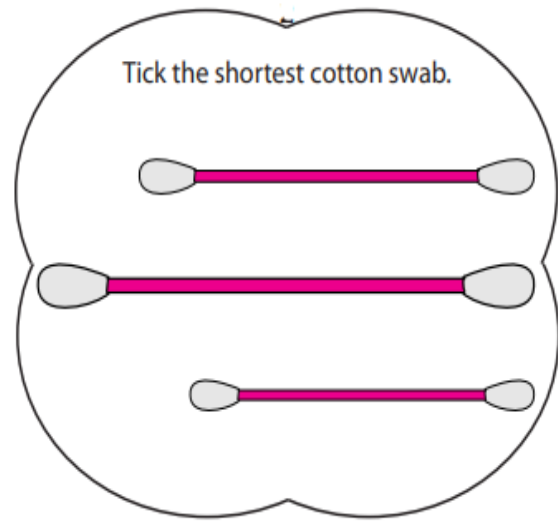
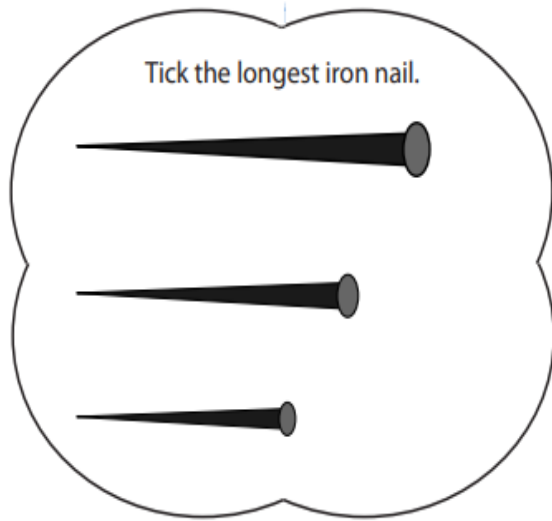


$$5 - 2 = \boxed{}$$




$$6 - 1 = \boxed{}$$

Choose the correct answer.



Match the shapes with the correct object:



Thank you



Question 1: Tick the living things and cross the non-living things:



Question 2: Match the seasons with the correct picture:



Autumn	Summer	Spring	Winter
---------------	---------------	---------------	---------------




Question 3: Label the parts of the plant by matching the parts from the box.

1. leaves
2. flower
3. roots
4. stem



Question 4: Circle the correct answer:



Push	Pull
-------------	-------------

Push	Pull
-------------	-------------